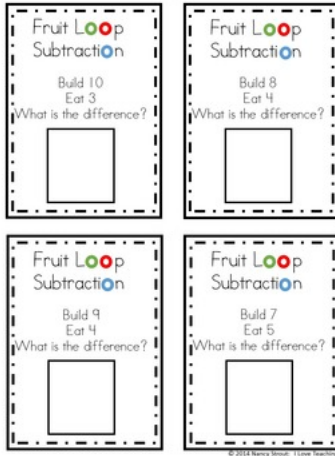



# Subtraction Strategies

## Manipulatives



## Number Line



## Counting On

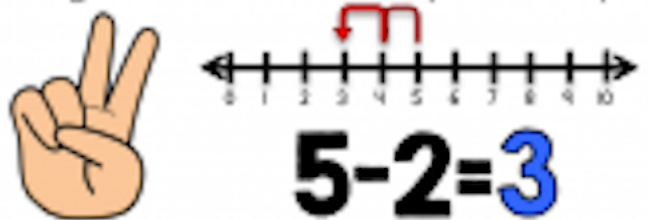
How many jumps from the middle number to the first number?



$$5 - 3 = ? \rightarrow 3 + ? = 5$$

## Counting Back

Count back on a number line or fingers to see where you end up.



$$5 - 2 = 3$$

## Draw a Picture

Draw how many you begin with and cross out how many you take away.

$$3 - 2 = 1$$



YOU  
got  
THIS!