


Which is Heavier?

Order each object by writing a number in the blank space.
Write "1" under the lightest item.
Write "3" under the heaviest item.
See the example.




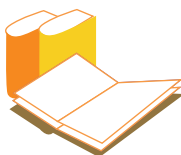


3



1



2



Challenge!

Draw an object that you think is heavier than the one below.

