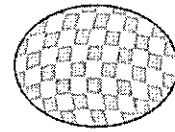


Easter Math


1. Mr. Shelton has 3 Easter baskets ready for the party. He has 9 more baskets to get ready. How many baskets will there be in all?



1

Easter Math

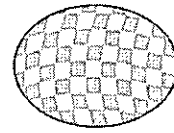
2. Andy bought 2 packages of chocolate Easter eggs. Each package had 7 eggs. How many eggs are in the two packages together?



2

Easter Math


3. Jill found 8 eggs and Cindy found 7 eggs. How many eggs did they find in all?



3

Easter Math

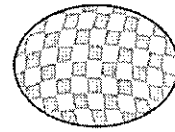
4. Mom hid 10 Easter eggs and Dad hid 8 Easter eggs. How many eggs are there to find?



4

Easter Math

5. Brian dyed 7 eggs and his brother dyed 6 eggs. How many eggs did they dye?



5

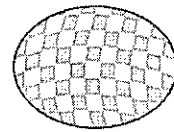
Easter Math

6. Carla used 11 cotton balls on her Easter bunny picture. Her friend Kelly used 5 cotton balls. How many cotton balls were used between the two girls for their art projects?

6

Easter Math


7. Amanda drew a bunny on 9 eggs and a flower on 9 eggs. How many eggs did she decorate with the bunnies and flowers?



7

Easter Math

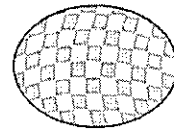
8. Tony had 12 Easter eggs. He dropped and cracked 2 of the eggs. How many eggs does Tony have left?



8

Easter Math


9. Gary put 4 Easter stickers in each of 3 cards. How many stickers did Gary use for the 3 cards?



9

Easter Math

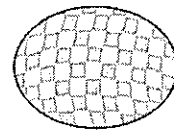
10. There were 15 stuffed bunnies in a basket. 6 eggs were given to the children. How many stuffed bunnies are left?



10

Easter Math

11. In the Bunny Walk, Mary ran 8 blocks and walked for 12 blocks. How many blocks did Mary cover?



11

Easter Math

12. For the party, 9 children brought blue Easter baskets and 8 children brought pink Easter baskets. How many Easter baskets were there for the party?

12

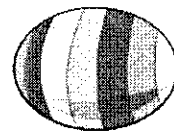
Easter Math

13. In Mrs. Erin's class, 15 students brought Easter treats. 4 students brought cookies and the rest brought cupcakes. How many students brought cupcakes?

13

Easter Math

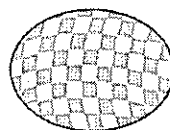
14. Grandpa has 5 grandchildren. He put 3 dollars in each card. How much money did Grandpa give in all?



14

Easter Math

15. Grandma has 10 plastic eggs and 9 real eggs. How many eggs does Grandma have?



15

Easter Math

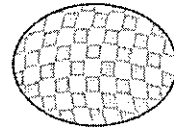
16. There were 15 Easter prizes on the table. Mr. Russel gave 7 prizes away. How many Easter prizes were left?



16

Easter Math


17. There were 2 each of purple, blue, red, yellow, pink, and green jellybeans. How many jellybeans were there in all?



17

Easter Math

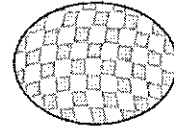
18. 15 children drew Easter bunnies and 2 drew Easter chicks. How many students drew chicks and bunnies?



18

Easter Math

19. The gym teacher told each student to hop 2 times. Then each student was told to hop 12 more times. How many times did each student have to hop?



19

Easter Math

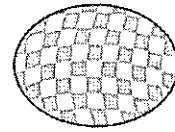
20. There were 18 Easter cups of punch. 14 children drank a cup of punch. How many cups were left?



20

Easter Math


21. In the basket there were 5 blue eggs, 6 yellow eggs, and 4 pink eggs. How many eggs were in the basket?



21

Easter Math

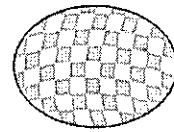
22. There were 6 chocolate bunnies in each of 3 baskets. One of the baskets was given away. How many chocolate bunnies were left?



22

Easter Math

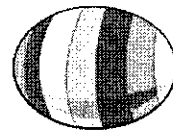
**23. Jacob painted 20 eggs.
His friend Kevin painted 17
eggs. How many more eggs
did Jacob paint than Kevin?**



23

Easter Math


**24. Each of 4 sisters found 4
Easter eggs in the hunt. How
many eggs did all of the
sisters find?**



24

Easter Math

Name _____



Card #	Answer	Card #	Answer
1		13	
2		14	
3		15	
4		16	
5		17	
6		18	
7		19	
8		20	
9		21	
10		22	
11		23	
12		24	